

Number Line - Simple Fractions (Uneven Tick Marks), Interval Spacing - Name

Denominator to Number Line

1

Which number line has a whole number divided into fifths?



B




2

Which number line has a whole number divided into sixths?

A



B



3

Which number line has a whole number divided into fourths?

A



B



4

Which number line has a whole number divided into halves?

A



B



5

Which number line has a whole number divided into fifths?

A



B




6

Which number line has a whole number divided into sixths?

A




B



7

Which number line has a whole number divided into sixths?

A



B



8

Which number line has a whole number divided into fifths?

A



B

