



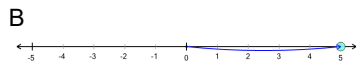
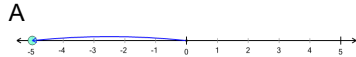
## Number Line - Single Operation with Negative Integers, Equation to Movement Image



1

$$+(-5)$$

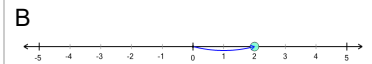
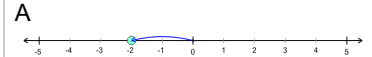
Which number line shows this operation?



2

$$+2$$

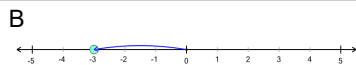
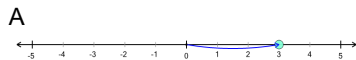
Which number line shows this operation?



3

$$-(-3)$$

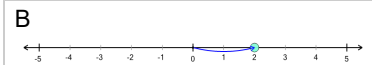
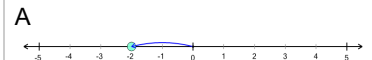
Which number line shows this operation?



4

$$+(-2)$$

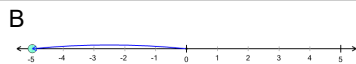
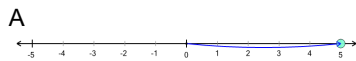
Which number line shows this operation?



5

$$-(-5)$$

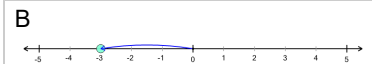
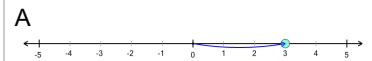
Which number line shows this operation?



6

$$+(-3)$$

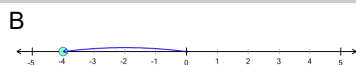
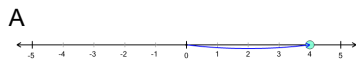
Which number line shows this operation?



7

$$+(-4)$$

Which number line shows this operation?



8

$$+3$$

Which number line shows this operation?

