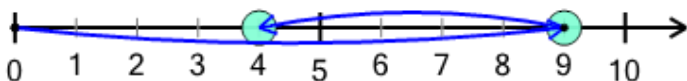




Number Line - Subtraction Positive Integers, Movement Image to Answer

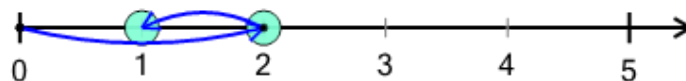


1 What number does the subtraction $9 - 5 = 4$ land on?



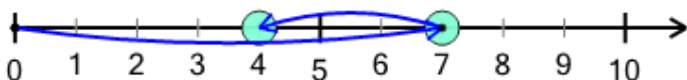
A	B	C	D
4	1	7	9

2 What number does the subtraction $2 - 1 = 1$ land on?



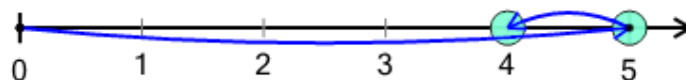
A	B	C
3	1	4

3 What number does the subtraction $7 - 3 = 4$ land on?



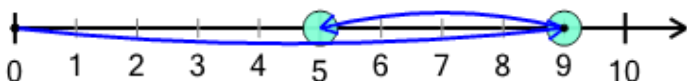
A	B	C	D	E	F
2	0	1	4	7	6

4 What number does the subtraction $5 - 1 = 4$ land on?



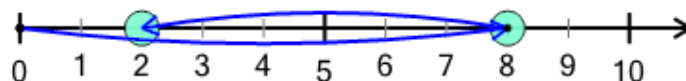
A	B	C	D
0	4	2	1

5 What number does the subtraction $9 - 4 = 5$ land on?



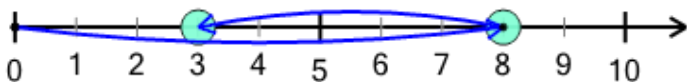
A	B	C	D	E
5	9	7	2	1

6 What number does the subtraction $8 - 6 = 2$ land on?



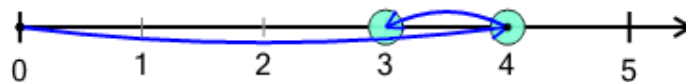
A	B	C	D	E	F
4	0	6	5	2	9

7 What number does the subtraction $8 - 5 = 3$ land on?



A	B	C	D
0	3	5	1

8 What number does the subtraction $4 - 1 = 3$ land on?



A	B	C
3	1	0