



Patterning - Next in 4 Item Repeating Shape Pattern



1 Find the item that would be next in this pattern



A



B



C




2 Find the item that would be next in this pattern



A



B



C



3 Find the item that would be next in this pattern



A



B



C



4 Find the item that would be next in this pattern



A



B



C



5 Find the item that would be next in this pattern



A



B



C




6 Find the item that would be next in this pattern




A



B



C



7 Find the item that would be next in this pattern



A



B



C



8 Find the item that would be next in this pattern



A



B



C

