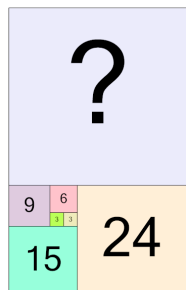




Patterning - Concept Intro (Fibonacci) - Picture to Missing Term



1



Find the term that would complete this Fibonacci pattern in the missing space

A	33	B	12
C	39	D	36
E	63	F	42

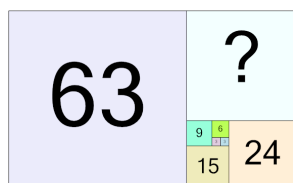
2



Find the term that would complete this Fibonacci pattern in the missing space

A	6	B	8
C	10	D	3
E	9	F	12

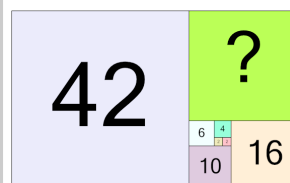
3



Find the term that would complete this Fibonacci pattern in the missing space

A	63	B	18
C	60	D	9
E	33	F	39

4



Find the term that would complete this Fibonacci pattern in the missing space

A	42	B	40
C	14	D	30
E	26	F	44

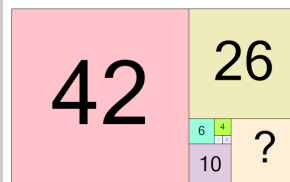
5



Find the term that would complete this Fibonacci pattern in the missing space

A	9	B	10
C	5	D	2
E	11	F	3

6



Find the term that would complete this Fibonacci pattern in the missing space

A	24	B	18
C	20	D	16
E	8	F	17

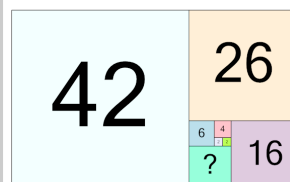
7



Find the term that would complete this Fibonacci pattern in the missing space

A	19	B	25
C	22	D	18
E	16	F	7

8



Find the term that would complete this Fibonacci pattern in the missing space

A	5	B	19
C	11	D	10
E	15	F	12