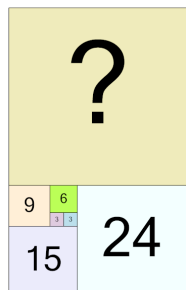




## Patterning - Concept Intro - (Fibonacci) - Picture to Next Term



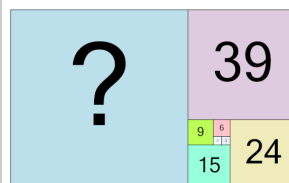
1



Find the term that would be next  
in this Fibonacci pattern

A	54	B	15
C	9	D	36
E	60	F	39

2



Find the term that would be next  
in this Fibonacci pattern

A	63	B	87
C	27	D	15
E	69	F	117

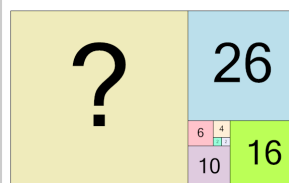
3



Find the term that would be next  
in this Fibonacci pattern

A	3	B	5
C	9	D	8
E	2	F	4

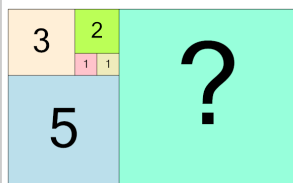
4



Find the term that would be next  
in this Fibonacci pattern

A	22	B	30
C	26	D	42
E	78	F	54

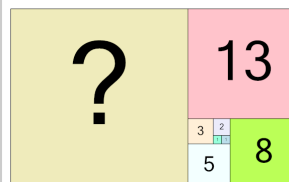
5



Find the term that would be next  
in this Fibonacci pattern

A	8	B	13
C	1	D	10
E	6	F	4

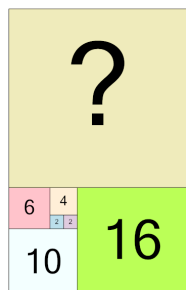
6



Find the term that would be next  
in this Fibonacci pattern

A	17	B	31
C	21	D	29
E	33	F	11

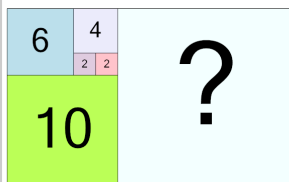
7



Find the term that would be next  
in this Fibonacci pattern

A	34	B	24
C	6	D	44
E	12	F	26

8



Find the term that would be next  
in this Fibonacci pattern

A	16	B	12
C	24	D	25
E	9	F	11