


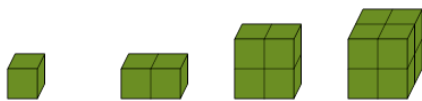


## Patterning - Concept Intro - (Geometric) - Picture to Term List



1

Find the terms shown in this geometric pattern



A

3, 4, 5

B

1, 2, 4, 8

2

Find the terms shown in this geometric pattern



A

1, 3, 9, 27

B

3, 4, 5

3

Find the terms shown in this geometric pattern



A

1, 3, 9, 27

B

16, 14, 12, 10

4

Find the terms shown in this geometric pattern



A

1, 3, 9, 27

B

2, 3, 4

5

Find the terms shown in this geometric pattern



A

3, 5, 7, 9

B

1, 2, 4, 8

6

Find the terms shown in this geometric pattern



A

1, 2, 3

B

1, 2, 4, 8

7

Find the terms shown in this geometric pattern



A

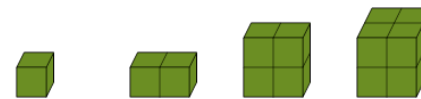
1, 3, 9, 27

B

4, 7, 4, 7, 4, 7

8

Find the terms shown in this geometric pattern



A

1, 2, 3, 5, 8, 13

B

1, 2, 4, 8