



Patterning - Concept Intro - (Geometric) - Term List to Picture



1


Which picture shows this
geometric pattern?

3, 6, 12

A



B



2

Which picture shows this
geometric pattern?

3, 9, 27

A



B



3

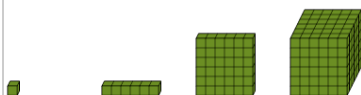
Which picture shows this
geometric pattern?

1, 2, 4, 8

A



B




4

Which picture shows this
geometric pattern?

2, 4, 8

A



B



5

Which picture shows this
geometric pattern?

1, 3, 9, 27

A



B



6

Which picture shows this
geometric pattern?

2, 6, 18

A



B

