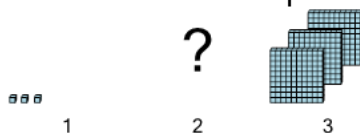


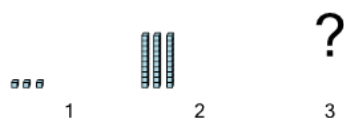
Patterning - Concept Intro (Place Value) - Picture to Missing Term

1 Find the term that would complete this place value pattern in the missing space




A	30	B	300
C	3	D	30,000
E	0	F	3,000

2 Find the term that would complete this place value pattern in the missing space



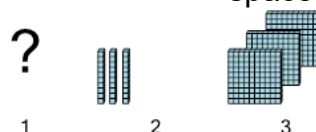
A	30	B	300
C	30,000	D	0
E	3	F	300,000

3 Find the term that would complete this place value pattern in the missing space



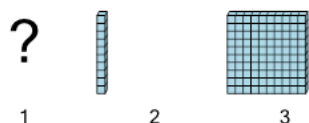
A	1	B	1,000
C	10,000	D	10
E	100	F	0

4 Find the term that would complete this place value pattern in the missing space




A	300	B	0	C	30	D	3,000	E	3
---	-----	---	---	---	----	---	-------	---	---

5 Find the term that would complete this place value pattern in the missing space



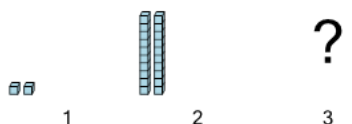
A	1	B	100	C	0	D	10	E	1,000
---	---	---	-----	---	---	---	----	---	-------

6 Find the term that would complete this place value pattern in the missing space



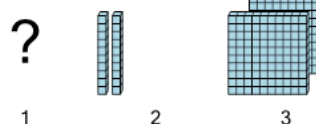
A	200	B	2
C	20,000	D	2,000
E	0	F	20

7 Find the term that would complete this place value pattern in the missing space



A	200,000	B	0
C	2	D	200
E	20	F	2,000

8 Find the term that would complete this place value pattern in the missing space



A	2	B	2,000	C	200	D	0	E	20
---	---	---	-------	---	-----	---	---	---	----