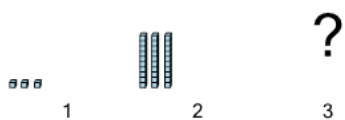




Patterning - Concept Intro - (Place Value) - Picture to Next Term

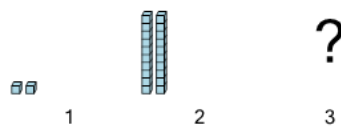


1 Find the term that would be next in this place value pattern



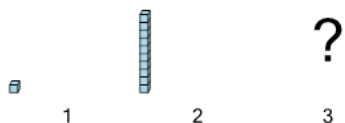
A	30,000	B	3
C	300	D	300,000
E	30	F	0

2 Find the term that would be next in this place value pattern



A	0	B	2,000
C	200	D	20,000
E	2	F	200,000

3 Find the term that would be next in this place value pattern



A	0	B	1,000
C	10,000	D	100,000
E	100	F	10