

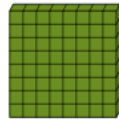


Patterning - Concept Intro (Quadratic) - Picture to Missing Term



1 Find the term that would complete this quadratic pattern in the missing space

?





A	B	C	D	E	F
45	55	30	10	50	25

2 Find the term that would complete this quadratic pattern in the missing space



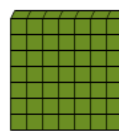
?



A	B	C	D	E	F
4	1	14	29	6	21

3 Find the term that would complete this quadratic pattern in the missing space

?


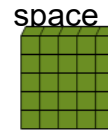


A	B	C	D	E	F
36	16	46	11	21	1

4 Find the term that would complete this quadratic pattern in the missing space



?




A	B	C	D	E	F
21	31	26	16	41	36

5 Find the term that would complete this quadratic pattern in the missing space





?



A	B	C	D	E	F
4	21	1	9	16	34

6 Find the term that would complete this quadratic pattern in the missing space

?




A	B	C	D	E	F
34	1	16	24	9	4

7 Find the term that would complete this quadratic pattern in the missing space



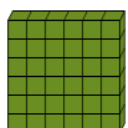

?



A	B	C	D	E	F
6	14	9	1	29	4

8 Find the term that would complete this quadratic pattern in the missing space

?



A	B	C	D	E	F
39	19	29	34	9	11