

Patterning - Term Value Identification for 4 Item Repeating Shape Pattern

1 What candy is the 3rd ($n=3$) in this pattern




2 What pet is the 4th ($n=4$) in this pattern



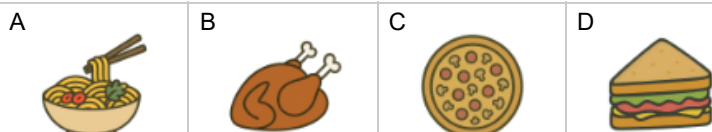
3 What fruit is the 3rd ($n=3$) in this pattern



4 What shape is the 8th ($n=8$) in this pattern



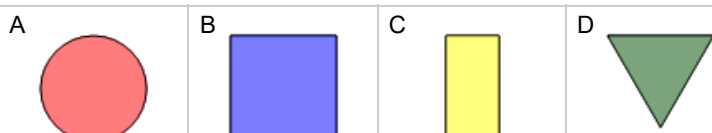
5 What food is the 1st ($n=1$) in this pattern



6 What fruit is the 7th ($n=7$) in this pattern



7 What shape is the 4th ($n=4$) in this pattern



8 What candy is the 3rd ($n=3$) in this pattern

