










## Percent of a number (10%) - Picture Question

<b>1</b> What would a 10% tip be? 	A 0 D 10	B 1 E 100	C 2	<b>2</b> What would a 10% tip be? 	A 5 D 1	B 0 E 4	C 400 F 40
<b>3</b> What would a 10% tip be? 	A 2 D 100	B 1 E 0	C 10	<b>4</b> What would a 10% tip be? 	A 0 D 4	B 30 E 3	C 300
<b>5</b> What would a 10% tip be? 	A 700 D 8	B 7 E 1	C 70	<b>6</b> What would a 10% tip be? 	A 3 D 0	B 20 E 200	C 2
<b>7</b> What would a 10% tip be? 	A 70 D 7	B 700 E 1	C 8	<b>8</b> What would a 10% tip be? 	A 40 D 5	B 400 E 1	C 0 F 4