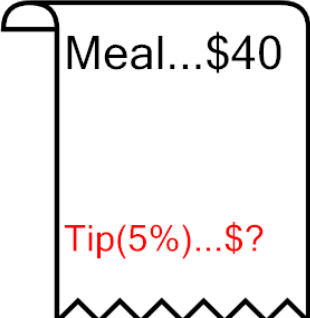


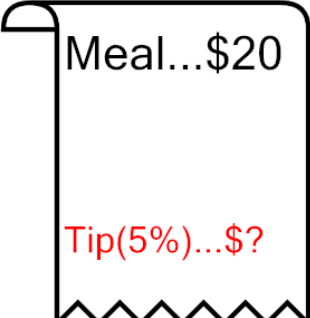


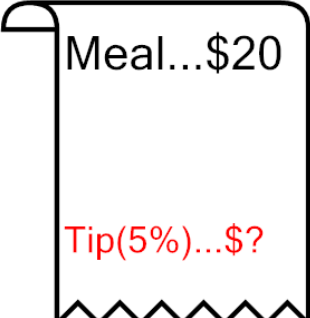









Percent of a number (5%) - Picture Question

1 What would a 5% tip be? 	A 0.5	B 0.2	C 0.4	2 What would a 5% tip be? 	A 2	B 2.3	C 0.5
3 What would a 5% tip be? 	D 200	E 2	F 20	D 2.1	E 200	F 2.4	
5 What would a 5% tip be? 	A 20	B 2	C 0.2	4 What would a 5% tip be? 	A 0.1	B 1.4	C 1
7 What would a 5% tip be? 	D 200	E 0.4	F 2.3	D 1.1	E 10	F 1.3	
5 What would a 5% tip be? 	A 10	B 100	C 0.3	6 What would a 5% tip be? 	A 10	B 1	C 0.1
7 What would a 5% tip be? 	D 0.2	E 1	F 1.5	6 What would a 5% tip be? 	D 0.2	E 0.3	F 1.2
7 What would a 5% tip be? 	A 200	B 2.4	C 2	8 What would a 5% tip be? 	A 1.1	B 100	C 0.1
7 What would a 5% tip be? 	D 0.4	E 2.3	F 20	8 What would a 5% tip be? 	D 1	E 0.2	F 10