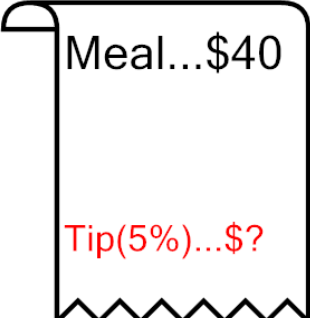



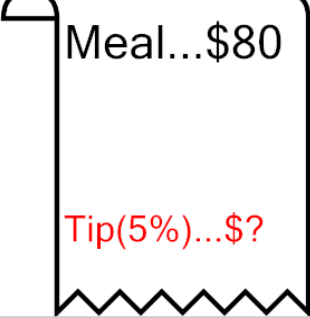
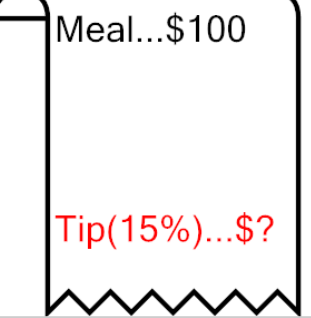
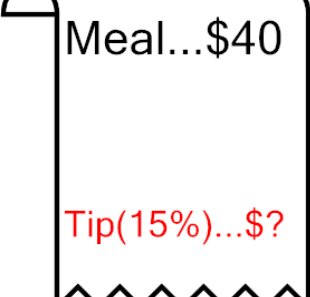
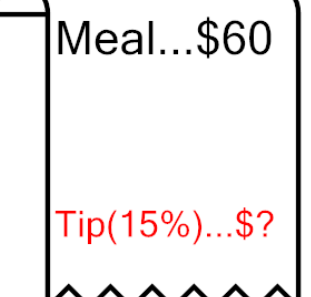




Percent of a number (5% multiples) - Picture Question

1 What would a 5% tip be? 	A 200 D 2.5	B 0.2 E 2	C 20 F 0.5	2 What would a 15% tip be? 	A 0.4 D 3.8	B 3 E 3.6	C 0.1 F 4.2
3 What would a 5% tip be? 	A 0.6 D 3	B 3.2 E 300	C 30 F 3.5	4 What would a 5% tip be? 	A 0.2 D 0.3	B 1.3 E 0.1	C 1 F 10
5 What would a 5% tip be? 	A 4 D 0.8	B 4.4 E 0.9	C 400 F 4.1	6 What would a 15% tip be? 	A 15.5 D 150	B 1,500 E 1.5	C 0.9 F 15
7 What would a 15% tip be? 	A 600 D 6.2	B 0.3 E 60	C 6 F 6.8	8 What would a 15% tip be? 	A 900 D 9.6	B 0.8 E 9	C 90 F 0.5