




## Percent reduction of a number (10%) - Concept Intro

1

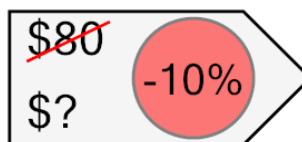
What is the total with a 10% discount? Hint, divide by 10 to find the amount saved!



|    |    |    |
|----|----|----|
| A  | B  | C  |
| 63 | 41 | 76 |
| D  | E  | F  |
| 47 | 85 | 57 |

2


What is the total with a 10% discount? Hint, divide by 10 to find the amount saved!



|    |    |    |
|----|----|----|
| A  | B  | C  |
| 94 | 36 | 83 |
| D  | E  | F  |
| 72 | 90 | 58 |

3


What is the total with a 10% discount? Hint, divide by 10 to find the amount saved!



|    |    |     |
|----|----|-----|
| A  | B  | C   |
| 57 | 81 | 41  |
| D  | E  | F   |
| 93 | 53 | 105 |

4


What is the total with a 10% discount? Hint, divide by 10 to find the amount saved!



|    |    |    |
|----|----|----|
| A  | B  | C  |
| 54 | 68 | 27 |
| D  | E  | F  |
| 35 | 32 | 43 |

5


What is the total with a 10% discount? Hint, divide by 10 to find the amount saved!



|    |    |    |
|----|----|----|
| A  | B  | C  |
| 59 | 46 | 76 |
| D  | E  | F  |
| 35 | 43 | 54 |

6

What is the total with a 10% discount? Hint, divide by 10 to find the amount saved!



|    |    |    |
|----|----|----|
| A  | B  | C  |
| 36 | 59 | 61 |
| D  | E  | F  |
| 45 | 41 | 65 |

7


What is the total with a 10% discount? Hint, divide by 10 to find the amount saved!



|    |    |    |
|----|----|----|
| A  | B  | C  |
| 63 | 76 | 38 |
| D  | E  | F  |
| 88 | 82 | 79 |

8

What is the total with a 10% discount? Hint, divide by 10 to find the amount saved!



|    |    |    |
|----|----|----|
| A  | B  | C  |
| 43 | 36 | 25 |
| D  | E  | F  |
| 52 | 45 | 59 |