




## Percent reduction of a number (10%) - Picture Question

**1** What is the total with a 10% discount?

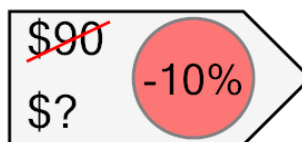
A	B	C
117	49	45



D	E	F
41	105	81

**2** What is the total with a 10% discount?


A	B	C
53	97	81



D	E	F
89	65	61

**3** What is the total with a 10% discount?


A	B	C
72	83	90



D	E	F
40	94	65

**4** What is the total with a 10% discount?


A	B	C
58	94	101



D	E	F
72	50	97

**5** What is the total with a 10% discount?

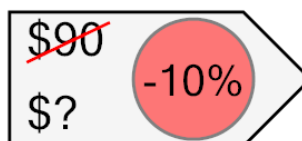
A	B	C
101	113	81



D	E	F
117	61	109

**6** What is the total with a 10% discount?


A	B	C
113	81	97



D	E	F
69	61	73

**7** What is the total with a 10% discount?

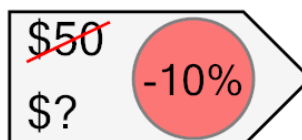
A	B	C
43	61	47



D	E	F
34	50	45

**8** What is the total with a 10% discount?

A	B	C
56	36	23



D	E	F
32	45	27