




Percent reduction of a number (10% multiples) - Picture Question

1 What is the total with a 10% discount?


A	B	C
61	45	50



D	E	F
32	59	36

2 What is the total with a 20% discount?


A	B	C
42	40	34



D	E	F
18	32	22

3 What is the total with a 20% discount?


A	B	C
62	56	28



D	E	F
67	39	64

4 What is the total with a 30% discount?

A	B	C
34	31	59



D	E	F
28	64	56

5 What is the total with a 30% discount?


A	B	C
61	55	42



D	E	F
32	34	25

6 What is the total with a 20% discount?


A	B	C
93	83	90



D	E	F
58	64	48

7 What is the total with a 10% discount?

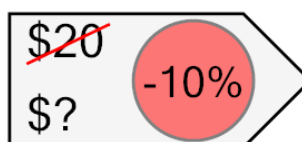
A	B	C
12	10	6



D	E	F
8	9	5

8 What is the total with a 10% discount?

A	B	C
18	17	9



D	E	F
21	15	23