



## Percent reduction of a number (10% multiples) - Picture Question

**1** What is the total with a 60% discount?


A	B	C
38	22	18



D	E	F
49	36	40

**2** What is the total with a 70% discount?


A	B	C
3	2	5



D	E	
4	1	

**3** What is the total with a 60% discount?

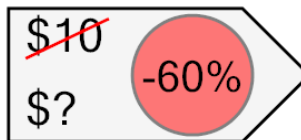
A	B	C
4	10	8



D	E	F
12	5	11

**4** What is the total with a 60% discount?


A	B	C
6	4	2



D	E	
3	5	

**5** What is the total with a 60% discount?

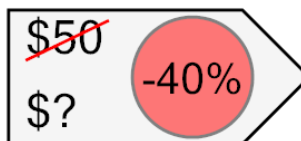
A	B	C
29	19	22



D	E	F
24	14	20

**6** What is the total with a 40% discount?

A	B	C
17	30	21



D	E	F
18	41	27

**7** What is the total with a 70% discount?


A	B	C
12	13	14



D	E	F
15	7	8

**8** What is the total with a 70% discount?

A	B	C
11	12	6



D	E	F
9	10	5