
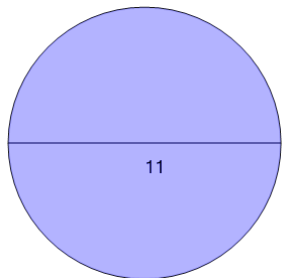




## Circumference (with hint and calculator)

**1**

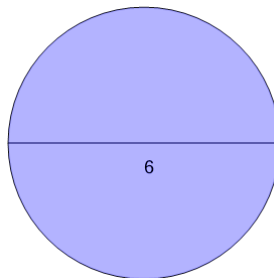
Find the circumference of the circle using the formula  $C = \pi d$  where  $d$  is the diameter



A	60.5	B	40.84
C	11	D	34.56
E	47.12	F	95.03

**2**

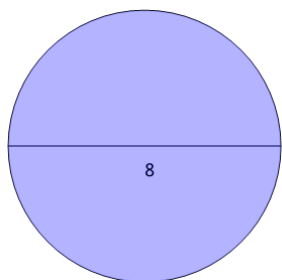
Find the circumference of the circle using the formula  $C = \pi d$  where  $d$  is the diameter



A	28.27	B	31.42
C	6	D	9.42
E	25.13	F	18.85

**3**

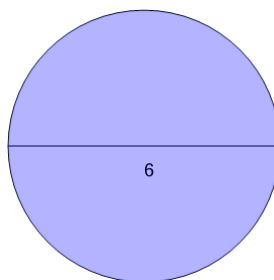
Find the circumference of the circle using the formula  $C = \pi d$  where  $d$  is the diameter



A	25.13	B	32
C	43.98	D	8
E	37.7	F	50.27

**4**

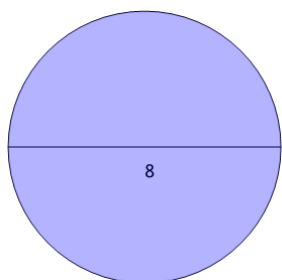
Find the circumference of the circle using the formula  $C = \pi d$  where  $d$  is the diameter



A	28.27	B	9.42
C	18.85	D	31.42
E	18	F	6

**5**

Find the circumference of the circle using the formula  $C = \pi d$  where  $d$  is the diameter



A	8	B	50.27
C	32	D	43.98
E	37.7	F	25.13