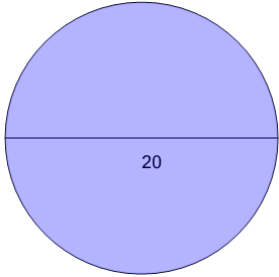
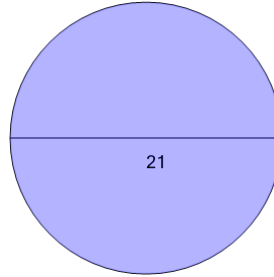
**1**

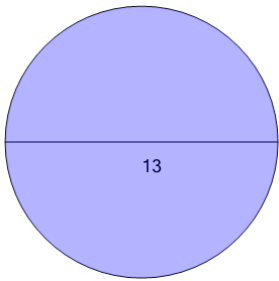
Find the circumference of the circle as a function of π

A	20π	B	4π
C	14π	D	12π
E	8π	F	34π

2

Find the circumference of the circle as a function of π

A	1π	B	9π
C	19π	D	31π
E	21π	F	37π

3

Find the circumference of the circle as a function of π

A	10π	B	18π
C	13π	D	12π
E	17π	F	15π