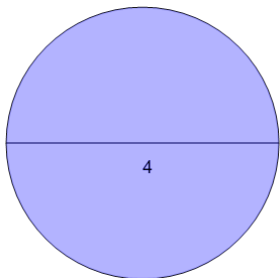


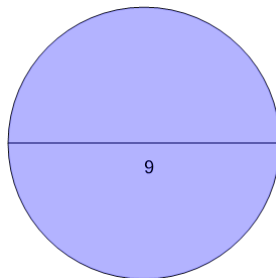


Circumference from Diameter - to Pi Value

1

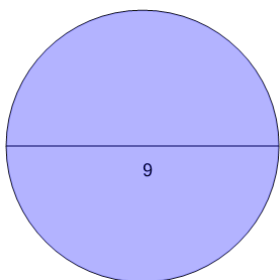
Find the circumference of the circle as a function of π

A	7π	B	10π
C	1π	D	3π
E	4π	F	5π

2

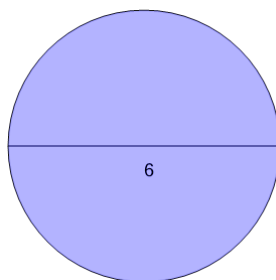
Find the circumference of the circle as a function of π

A	10π	B	9π
C	4π	D	6π
E	13π	F	12π

3

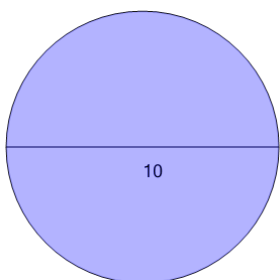
Find the circumference of the circle as a function of π

A	9π	B	14π
C	3π	D	18π
E	1π	F	5π

4

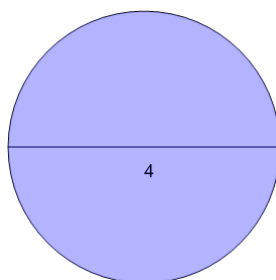
Find the circumference of the circle as a function of π

A	4π	B	3π
C	1π	D	6π
E	5π	F	12π

5

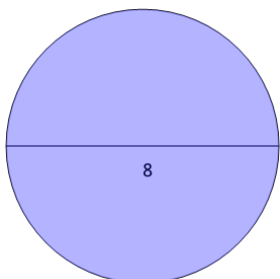
Find the circumference of the circle as a function of π

A	11π	B	18π
C	6π	D	8π
E	10π	F	9π

6

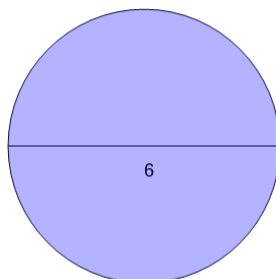
Find the circumference of the circle as a function of π

A	9π	B	5π
C	13π	D	1π
E	4π	F	3π

7

Find the circumference of the circle as a function of π

A	16π	B	15π
C	17π	D	3π
E	4π	F	8π

8

Find the circumference of the circle as a function of π

A	7π	B	6π
C	4π	D	1π
E	3π	F	8π