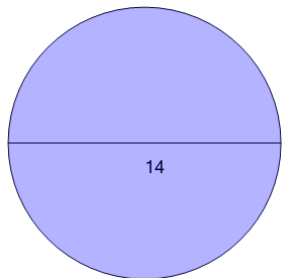
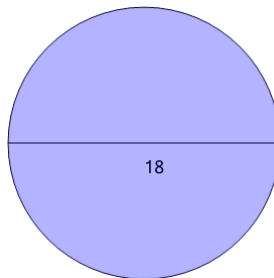


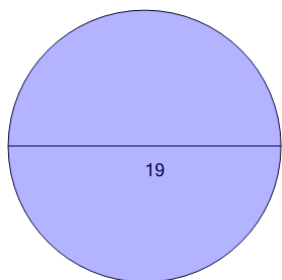
Circumference from Diameter - to Pi Value

1Find the circumference of the circle as a function of π 

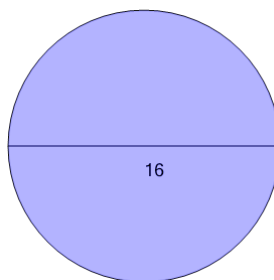
A	17π	B	14π
C	13π	D	9π
E	8π	F	15π

2Find the circumference of the circle as a function of π 

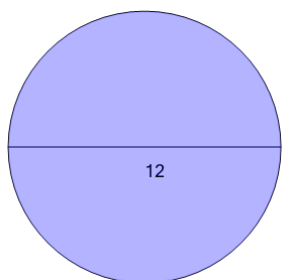
A	10π	B	22π
C	27π	D	26π
E	18π	F	11π

3Find the circumference of the circle as a function of π 

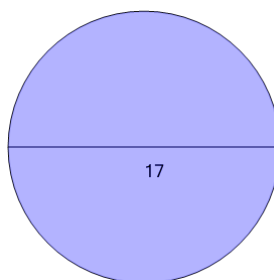
A	27π	B	9π
C	10π	D	17π
E	15π	F	19π

4Find the circumference of the circle as a function of π 

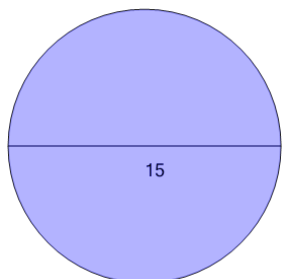
A	12π	B	9π
C	16π	D	22π
E	13π	F	25π

5Find the circumference of the circle as a function of π 

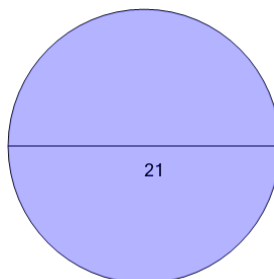
A	15π	B	12π
C	10π	D	9π
E	20π	F	13π

6Find the circumference of the circle as a function of π 

A	19π	B	18π
C	20π	D	10π
E	12π	F	17π

7Find the circumference of the circle as a function of π 

A	24π	B	15π
C	14π	D	20π
E	21π	F	8π

8Find the circumference of the circle as a function of π 

A	15π	B	25π
C	7π	D	21π
E	27π	F	23π