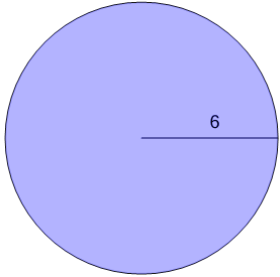
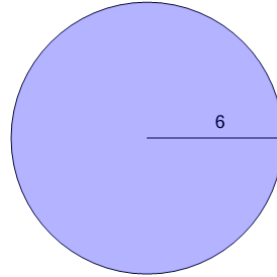


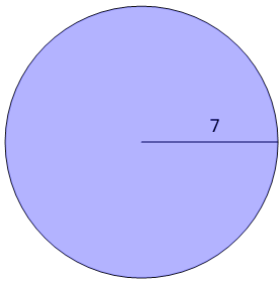
Circumference from Radius - to Pi Value

1Find the circumference of the circle as a function of π

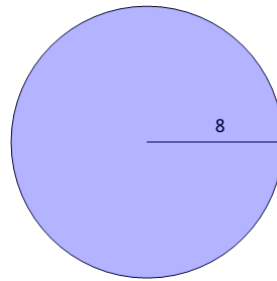
A	15π	B	19π
C	17π	D	13π
E	12π	F	14π

2Find the circumference of the circle as a function of π

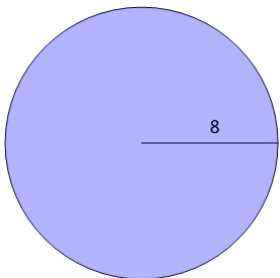
A	10π	B	18π
C	4π	D	13π
E	16π	F	12π

3Find the circumference of the circle as a function of π

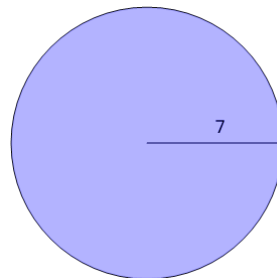
A	7π	B	15π
C	13π	D	21π
E	14π	F	22π

4Find the circumference of the circle as a function of π

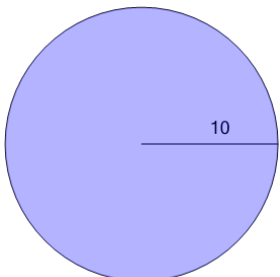
A	12π	B	16π
C	13π	D	6π
E	18π	F	11π

5Find the circumference of the circle as a function of π

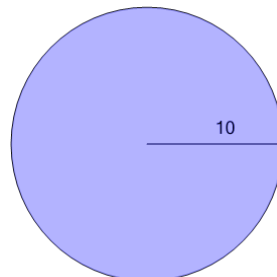
A	25π	B	15π
C	19π	D	16π
E	17π	F	6π

6Find the circumference of the circle as a function of π

A	22π	B	6π
C	14π	D	21π
E	23π	F	19π

7Find the circumference of the circle as a function of π

A	26π	B	2π
C	20π	D	22π
E	8π	F	18π

8Find the circumference of the circle as a function of π

A	14π	B	24π
C	20π	D	2π
E	10π	F	34π