


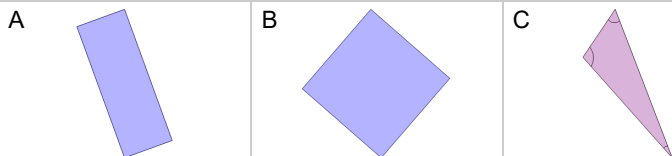


## Perimeter of a Simple Shape Formula - Formula to Shape



**1** What shape's perimeter would this formula calculate?

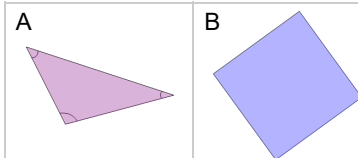
$$\text{side A} + \text{side B} + \text{side C}$$



**2**

What shape's perimeter would this formula calculate?

$$4 \times \text{side}$$



**3** What shape's perimeter would this formula calculate?

$$2 \times (\text{length} + \text{width})$$

