
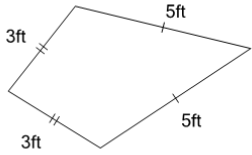


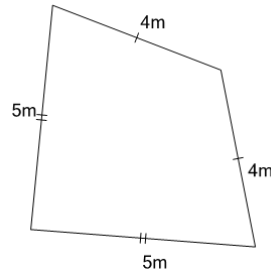


Perimeter of a Kite - Concept Intro

**1**

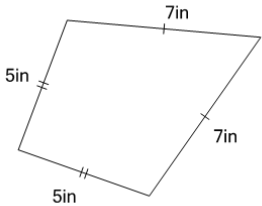
Find the perimeter (the total length of all sides) of this kite

A	29ft	B	13ft
C	16ft	D	6ft
E	3ft	F	19ft

2

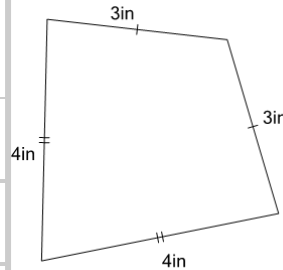
Find the perimeter (the total length of all sides) of this kite

A	18m	B	11m
C	29m	D	14m
E	7m	F	4m

3

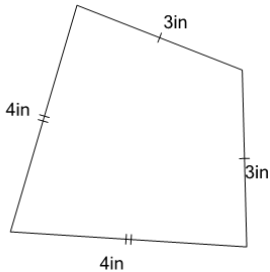
Find the perimeter (the total length of all sides) of this kite

A	38in	B	48in
C	24in	D	34in
E	10in	F	43in

4

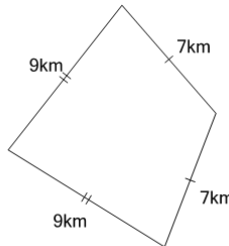
Find the perimeter (the total length of all sides) of this kite

A	6in	B	22in
C	14in	D	25in
E	3in	F	28in

5

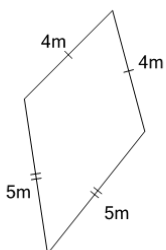
Find the perimeter (the total length of all sides) of this kite

A	28in	B	8in
C	14in	D	3in
E	17in	F	20in

6

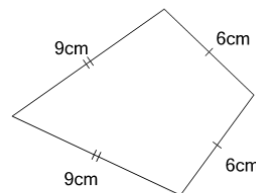
Find the perimeter (the total length of all sides) of this kite

A	19km	B	6km
C	51km	D	32km
E	38km	F	13km

7

Find the perimeter (the total length of all sides) of this kite

A	29m	B	25m
C	32m	D	36m
E	18m	F	11m

8

Find the perimeter (the total length of all sides) of this kite

A	18cm	B	30cm
C	60cm	D	6cm
E	48cm	F	24cm