
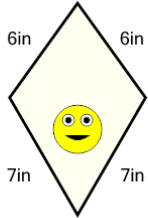




Perimeter of a Kite - Picture Intro

**1**

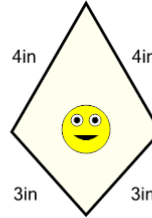
How long is the border around the outside of this painting?



A	14in	B	26in
C	18in	D	22in
E	40in	F	6in

2

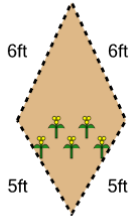
How long is the border around the outside of this painting?



A	22in	B	14in
C	5in	D	7in
E	19in	F	21in

3

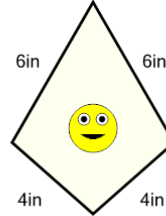
How long is the fence around this garden?



A	18ft	B	22ft
C	20ft	D	36ft
E	40ft	F	34ft

4

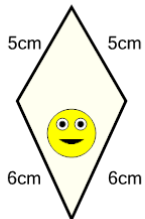
How long is the border around the outside of this painting?



A	38in	B	20in
C	30in	D	12in
E	18in	F	26in

5

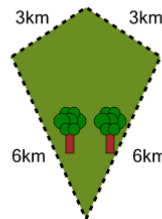
How long is the border around the outside of this painting?



A	20cm	B	22cm
C	18cm	D	24cm
E	28cm	F	26cm

6

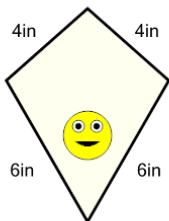
How far is it to run around the outside of this park?



A	26km	B	23km
C	14km	D	21km
E	19km	F	18km

7

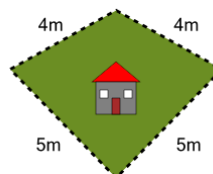
How long is the border around the outside of this painting?



A	30in	B	2in
C	10in	D	22in
E	6in	F	20in

8

How long is the fence around this yard?



A	11m	B	23m
C	10m	D	18m
E	16m	F	19m