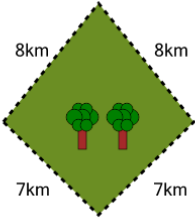




Perimeter of a Kite - Picture Intro

**1**

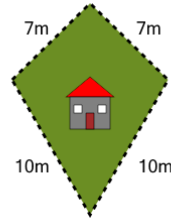
How far is it to run around the outside of this park?



A	36km	B	42km
C	30km	D	45km
E	54km	F	24km

2

How long is the fence around this yard?



A	46m	B	31m
C	34m	D	22m
E	19m	F	37m

3

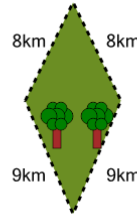
How long is the fence around this yard?



A	6m	B	8m
C	40m	D	24m
E	34m	F	26m

4

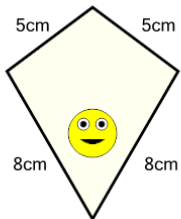
How far is it to run around the outside of this park?



A	52km	B	13km
C	19km	D	55km
E	34km	F	61km

5

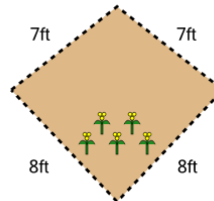
How long is the border around the outside of this painting?



A	6cm	B	12cm
C	42cm	D	26cm
E	32cm	F	24cm

6

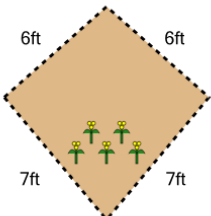
How long is the fence around this garden?



A	30ft	B	24ft
C	21ft	D	3ft
E	45ft	F	48ft

7

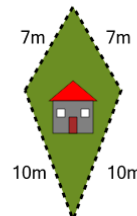
How long is the fence around this garden?



A	18ft	B	24ft
C	26ft	D	16ft
E	22ft	F	12ft

8

How long is the fence around this yard?



A	58m	B	40m
C	28m	D	22m
E	34m	F	55m