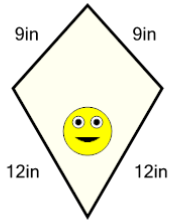
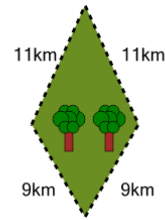


## Perimeter of a Kite - Picture Intro

**1**

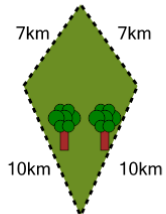
How long is the border around the outside of this painting?

A	18in	B	42in
C	78in	D	22in
E	66in	F	62in

**2**

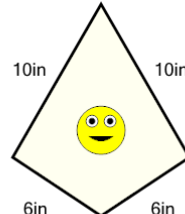
How far is it to run around the outside of this park?

A	28km	B	48km
C	40km	D	68km
E	52km	F	16km

**3**

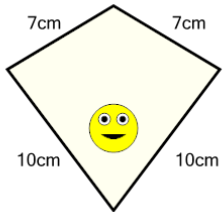
How far is it to run around the outside of this park?

A	31km	B	34km
C	37km	D	46km
E	7km	F	22km

**4**

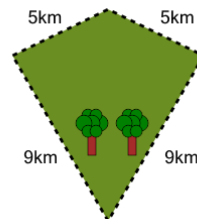
How long is the border around the outside of this painting?

A	50in	B	29in
C	32in	D	38in
E	11in	F	23in

**5**

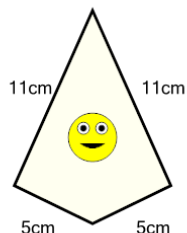
How long is the border around the outside of this painting?

A	34cm	B	19cm
C	43cm	D	49cm
E	58cm	F	16cm

**6**

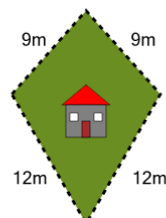
How far is it to run around the outside of this park?

A	26km	B	44km
C	28km	D	30km
E	40km	F	12km

**7**

How long is the border around the outside of this painting?

A	17cm	B	41cm
C	26cm	D	32cm
E	11cm	F	38cm

**8**

How long is the fence around this yard?

A	70m	B	10m
C	38m	D	14m
E	18m	F	42m