

Length of a Line on a Grid - 1 Segment, 1 Labelled (Irregular) - To Length

1

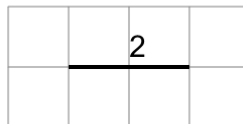
Find the length of the line on this grid of 1x1 squares



A	10	B	7
C	6	D	9
E	2	F	3

2

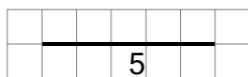
Find the length of the line on this grid of 1x1 squares



A	8	B	1
C	6	D	5
E	7	F	2

3

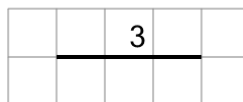
Find the length of the line on this grid of 1x1 squares



A	4	B	5
C	6	D	1
E	2	F	9

4

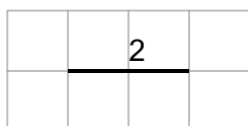
Find the length of the line on this grid of 1x1 squares



A	5	B	10
C	6	D	9
E	3	F	7

5


Find the length of the line on this grid of 1x1 squares



A	3	B	7
C	2	D	8
E	1	F	4

6

Find the length of the line on this grid of 1x1 squares



A	6	B	3
C	8	D	4
E	10	F	2