

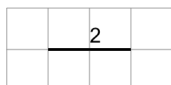


Length of a Line on a Grid - 1 Segment, 1 Labelled (Irregular) - To Shape

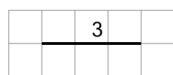
1

Find the line that has a length of 3 on the grid of 1x1 squares

A

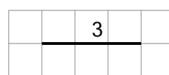


B

**2**

Find the line that has a length of 4 on the grid of 1x1 squares

A




B

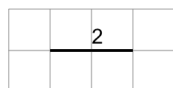
**3**

Find the line that has a length of 2 on the grid of 1x1 squares

A

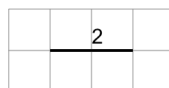


B

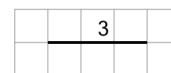
**4**

Find the line that has a length of 3 on the grid of 1x1 squares

A



B


**5**

Find the line that has a length of 2 on the grid of 1x1 squares

A




B

**6**

Find the line that has a length of 5 on the grid of 1x1 squares

A



B

