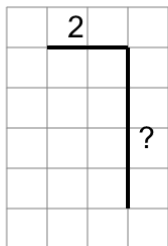
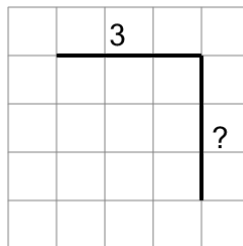


Length of a Line on a Grid - 2 Segment, 1 Labelled (Irregular) - To Length

1

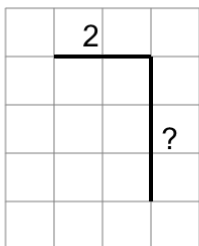
Find the length of the line on this grid of 1x1 squares

A	2	B	14
C	6	D	1
E	10	F	3

2

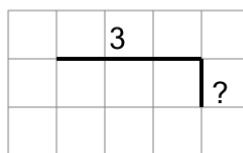
Find the length of the line on this grid of 1x1 squares

A	14	B	2
C	7	D	13
E	6	F	1

3

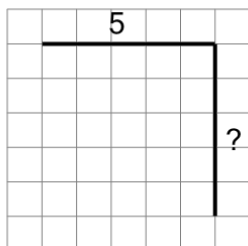
Find the length of the line on this grid of 1x1 squares

A	3	B	2
C	1	D	5
E	7	F	13

4

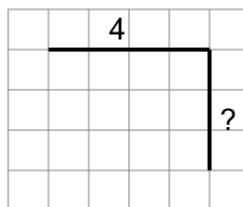
Find the length of the line on this grid of 1x1 squares

A	10	B	3
C	4	D	8
E	2	F	5

5

Find the length of the line on this grid of 1x1 squares

A	16	B	5
C	4	D	6
E	3	F	10

6

Find the length of the line on this grid of 1x1 squares

A	12	B	7
C	1	D	8
E	4	F	11