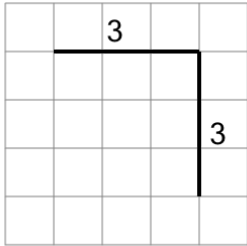


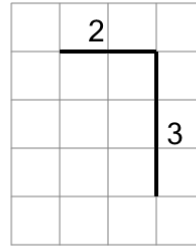


Length of a Line on a Grid - 2 Segment, 2 Labelled (Irregular) - To Length

1

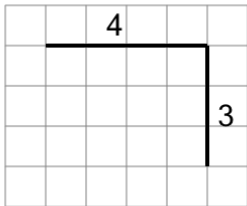
Find the length of the line on
this grid of 1x1 squares

A	7	B	5
C	14	D	4
E	2	F	6

2

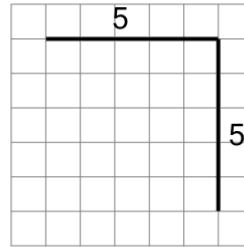
Find the length of the line on
this grid of 1x1 squares

A	10	B	2
C	5	D	4
E	3	F	6

3

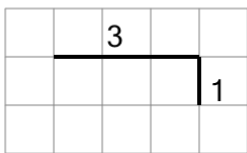
Find the length of the line on
this grid of 1x1 squares

A	4	B	10
C	5	D	13
E	16	F	7

4

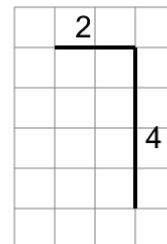
Find the length of the line on
this grid of 1x1 squares

A	2	B	19
C	10	D	6
E	11	F	9

5

Find the length of the line on
this grid of 1x1 squares

A	7	B	10
C	3	D	6
E	4	F	9

6

Find the length of the line on
this grid of 1x1 squares

A	3	B	14
C	12	D	15
E	6	F	9