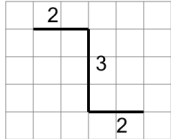


## Length of a Line on a Grid - 3 Segment, 3 Labelled (Irregular) - To Shape

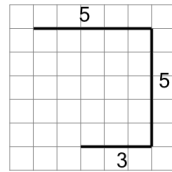
1

Find the line that has a length of 13 on the grid of 1x1 squares

A



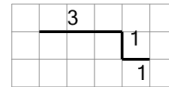
B



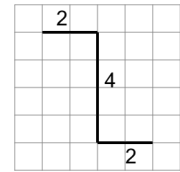
2

Find the line that has a length of 5 on the grid of 1x1 squares

A



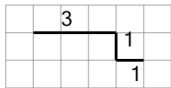
B



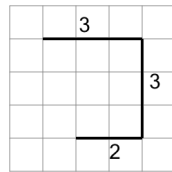
3

Find the line that has a length of 8 on the grid of 1x1 squares

A



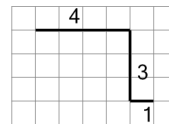
B



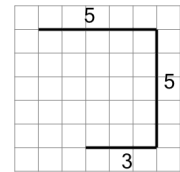
4

Find the line that has a length of 8 on the grid of 1x1 squares

A



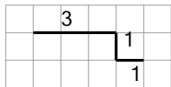
B



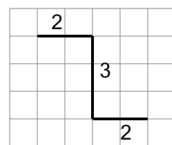
5

Find the line that has a length of 7 on the grid of 1x1 squares

A



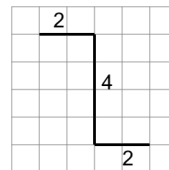
B



6

Find the line that has a length of 8 on the grid of 1x1 squares

A



B

