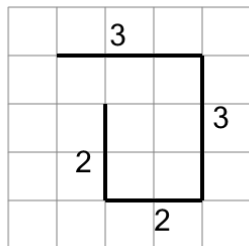


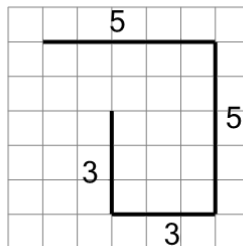


Length of a Line on a Grid - 4 Segment, 4 Labelled (Irregular) - To Length

1

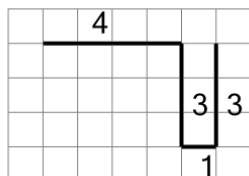
Find the length of the line on this grid of 1x1 squares

A	14	B	13
C	3	D	7
E	10	F	8

2

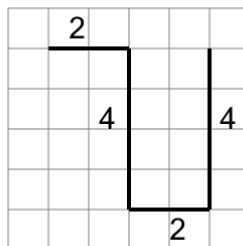
Find the length of the line on this grid of 1x1 squares

A	21	B	13
C	11	D	16
E	19	F	20

3

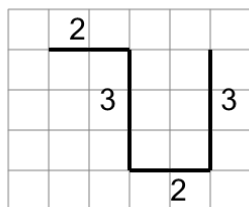
Find the length of the line on this grid of 1x1 squares

A	20	B	11
C	3	D	16
E	12	F	19

4

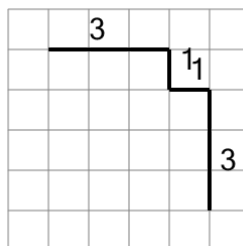
Find the length of the line on this grid of 1x1 squares

A	4	B	15
C	18	D	8
E	12	F	6

5

Find the length of the line on this grid of 1x1 squares

A	11	B	16
C	9	D	10
E	8	F	7

6

Find the length of the line on this grid of 1x1 squares

A	5	B	9
C	3	D	2
E	8	F	1