

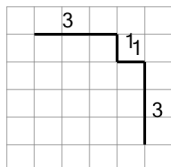


Length of a Line on a Grid - 4 Segment, 4 Labelled (Irregular) - To Shape

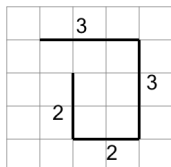
1

Find the line that has a length of 8 on the grid of 1x1 squares

A

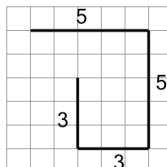


B

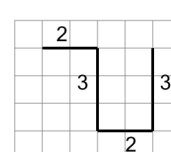
**2**

Find the line that has a length of 10 on the grid of 1x1 squares

A

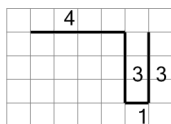


B

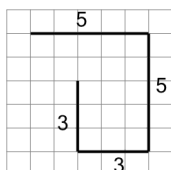
**3**

Find the line that has a length of 11 on the grid of 1x1 squares

A

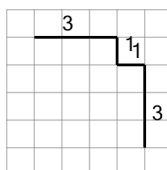


B

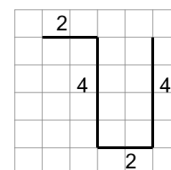
**4**

Find the line that has a length of 12 on the grid of 1x1 squares

A

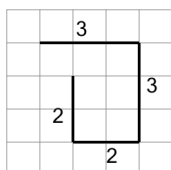


B

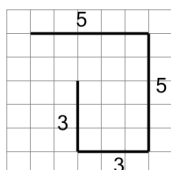
**5**

Find the line that has a length of 16 on the grid of 1x1 squares

A

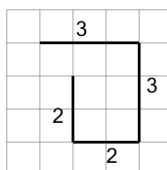


B

**6**

Find the line that has a length of 10 on the grid of 1x1 squares

A



B

