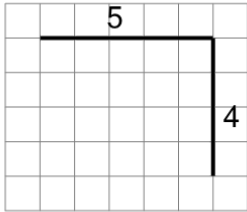
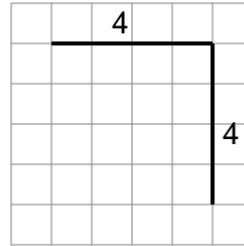


Length of a Line on a Grid - 2 Segment, 2 Labelled (Regular) - To Length

1

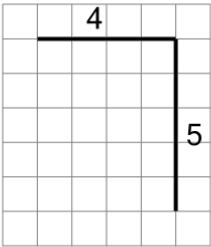
Find the length of the line on this grid of 1x1 squares

A	8	B	6
C	11	D	1
E	9	F	14

2

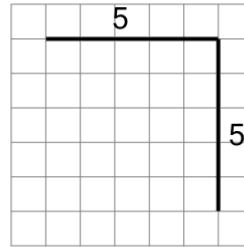
Find the length of the line on this grid of 1x1 squares

A	5	B	4
C	6	D	9
E	8	F	17

3

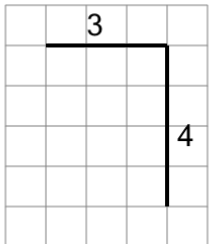
Find the length of the line on this grid of 1x1 squares

A	6	B	1
C	16	D	10
E	9	F	11

4

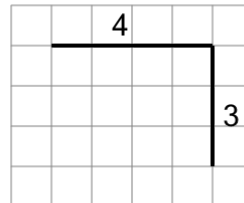
Find the length of the line on this grid of 1x1 squares

A	10	B	16
C	14	D	1
E	12	F	6

5

Find the length of the line on this grid of 1x1 squares

A	2	B	7
C	4	D	1
E	3	F	15

6

Find the length of the line on this grid of 1x1 squares

A	2	B	7
C	12	D	14
E	3	F	1