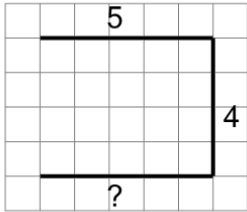
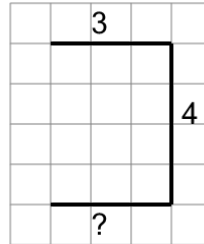


Length of a Line on a Grid - 3 Segment, 2 Labeled (Regular) - To Length

1

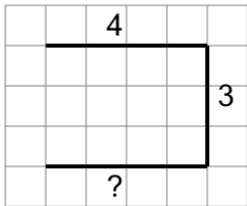
Find the length of the line on this grid of 1x1 squares

A	23	B	14
C	13	D	20
E	19	F	4

2

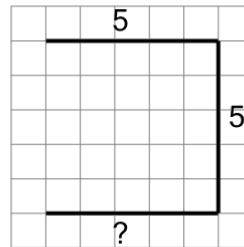
Find the length of the line on this grid of 1x1 squares

A	14	B	10
C	9	D	18
E	16	F	19

3

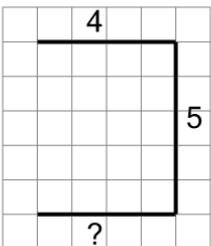
Find the length of the line on this grid of 1x1 squares

A	19	B	11
C	8	D	2
E	14	F	9

4

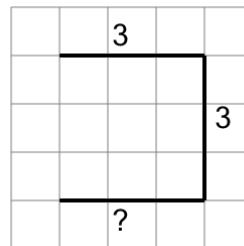
Find the length of the line on this grid of 1x1 squares

A	15	B	21
C	5	D	16
E	9	F	11

5

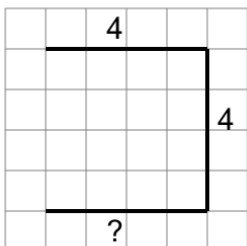
Find the length of the line on this grid of 1x1 squares

A	8	B	16
C	21	D	13
E	5	F	17

6

Find the length of the line on this grid of 1x1 squares

A	9	B	5
C	1	D	8
E	15	F	2

7

Find the length of the line on this grid of 1x1 squares

A	7	B	12
C	20	D	17
E	3	F	5