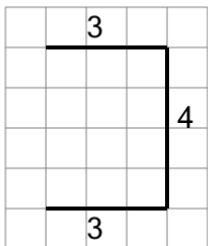
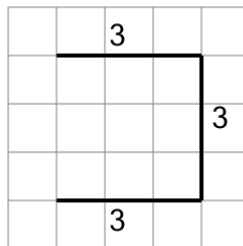


Length of a Line on a Grid - 3 Segment, 3 Labelled (Regular) - To Length

1

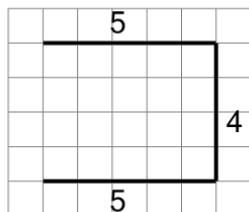
Find the length of the line on this grid of 1x1 squares

A	10	B	17
C	5	D	13
E	8	F	18

2

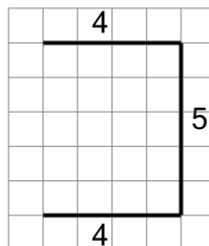
Find the length of the line on this grid of 1x1 squares

A	11	B	2
C	9	D	14
E	10	F	4

3

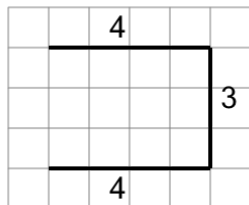
Find the length of the line on this grid of 1x1 squares

A	10	B	9
C	8	D	14
E	13	F	15

4

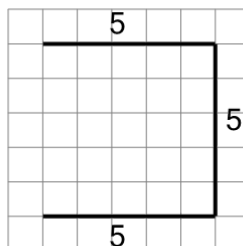
Find the length of the line on this grid of 1x1 squares

A	11	B	9
C	16	D	3
E	18	F	13

5

Find the length of the line on this grid of 1x1 squares

A	11	B	15
C	1	D	16
E	18	F	6

6

Find the length of the line on this grid of 1x1 squares

A	11	B	5
C	10	D	15
E	8	F	22