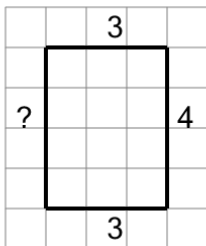
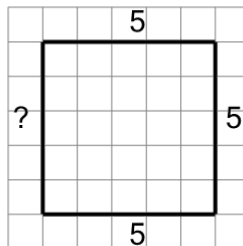


Length of a Line on a Grid - 4 Segment, 3 Labelled (Regular) - To Length

1

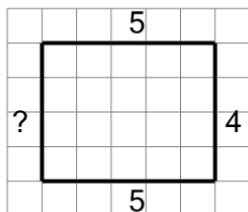
Find the length of the line on this grid of 1x1 squares

A	5	B	22
C	20	D	14
E	16	F	4

2

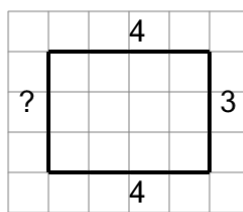
Find the length of the line on this grid of 1x1 squares

A	4	B	18
C	28	D	20
E	24	F	32

3

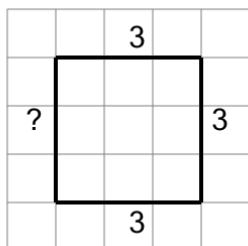
Find the length of the line on this grid of 1x1 squares

A	25	B	9
C	18	D	17
E	8	F	15

4

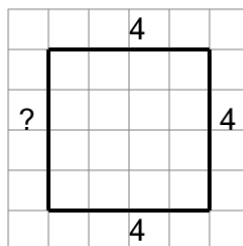
Find the length of the line on this grid of 1x1 squares

A	9	B	23
C	14	D	18
E	10	F	12

5

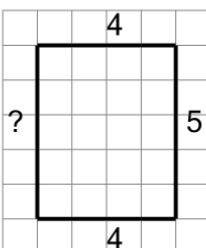
Find the length of the line on this grid of 1x1 squares

A	21	B	5
C	2	D	7
E	12	F	9

6

Find the length of the line on this grid of 1x1 squares

A	7	B	23
C	10	D	9
E	16	F	18

7

Find the length of the line on this grid of 1x1 squares

A	12	B	18
C	15	D	10
E	8	F	9