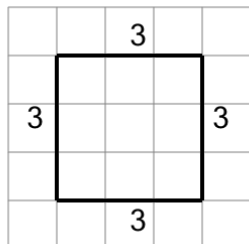
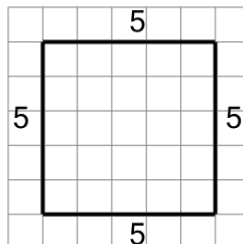


## Length of a Line on a Grid - 4 Segment, 4 Labelled (Regular) - To Length

**1**

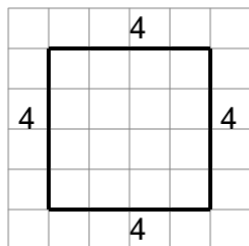
Find the length of the line on this grid of 1x1 squares

A	15	B	8
C	7	D	12
E	17	F	20

**2**

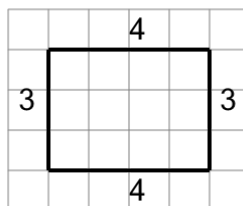
Find the length of the line on this grid of 1x1 squares

A	20	B	22
C	26	D	38
E	18	F	2

**3**

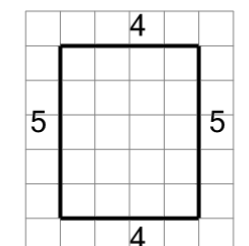
Find the length of the line on this grid of 1x1 squares

A	16	B	18
C	14	D	7
E	6	F	25

**4**

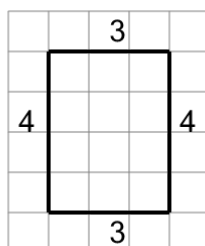
Find the length of the line on this grid of 1x1 squares

A	8	B	23
C	12	D	10
E	14	F	20

**5**

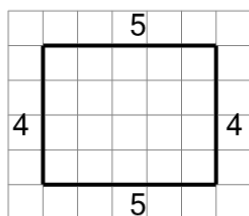
Find the length of the line on this grid of 1x1 squares

A	18	B	13
C	14	D	17
E	9	F	11

**6**

Find the length of the line on this grid of 1x1 squares

A	15	B	14
C	12	D	10
E	5	F	16

**7**

Find the length of the line on this grid of 1x1 squares

A	9	B	16
C	12	D	18
E	17	F	20