

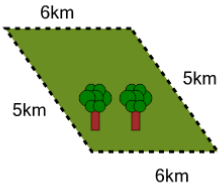


## Perimeter of a Parallelogram - Picture Intro



1

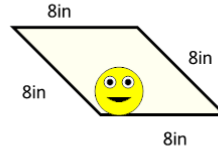
How far is it to run around the outside of this park?



A	22km	B	8km
C	18km	D	14km
E	24km	F	26km

2

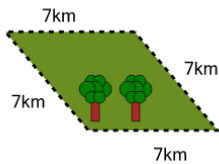
How long is the border around the outside of this painting?



A	32in	B	50in
C	14in	D	44in
E	8in	F	47in

3

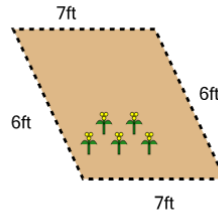
How far is it to run around the outside of this park?



A	42km	B	26km
C	28km	D	36km
E	24km	F	10km

4

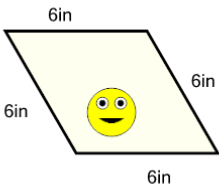
How long is the fence around this garden?



A	38ft	B	16ft
C	8ft	D	32ft
E	44ft	F	26ft

5

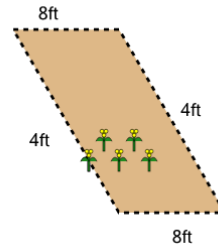
How long is the border around the outside of this painting?



A	16in	B	18in
C	20in	D	42in
E	24in	F	30in

6

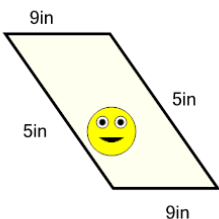
How long is the fence around this garden?



A	4ft	B	24ft
C	32ft	D	28ft
E	38ft	F	34ft

7

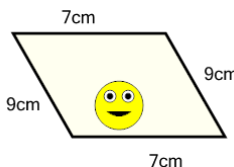
How long is the border around the outside of this painting?



A	34in	B	26in
C	22in	D	44in
E	30in	F	28in

8

How long is the border around the outside of this painting?



A	44cm	B	2cm
C	50cm	D	56cm
E	32cm	F	5cm