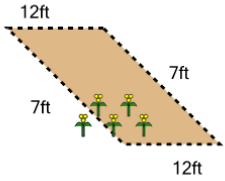


Perimeter of a Parallelogram - Picture Intro

1

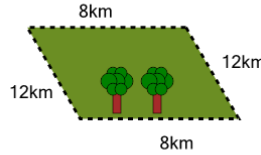
How long is the fence around this garden?



A	17ft	B	47ft
C	44ft	D	32ft
E	38ft	F	59ft

2

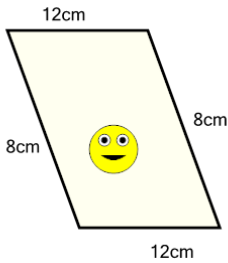
How far is it to run around the outside of this park?



A	44km	B	8km
C	52km	D	76km
E	40km	F	32km

3

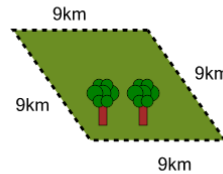
How long is the border around the outside of this painting?



A	24cm	B	52cm
C	56cm	D	40cm
E	36cm	F	32cm

4

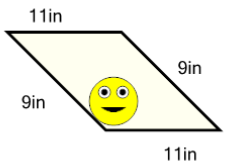
How far is it to run around the outside of this park?



A	18km	B	15km
C	45km	D	21km
E	48km	F	36km

5

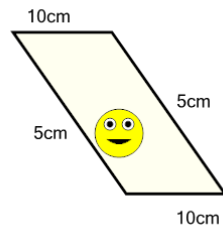
How long is the border around the outside of this painting?



A	56in	B	48in
C	40in	D	12in
E	36in	F	76in

6

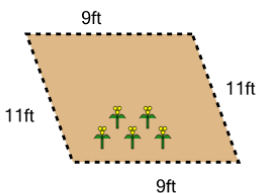
How long is the border around the outside of this painting?



A	57cm	B	3cm
C	42cm	D	39cm
E	30cm	F	45cm

7

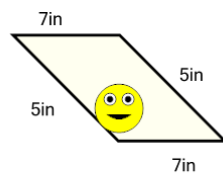
How long is the fence around this garden?



A	40ft	B	36ft
C	44ft	D	48ft
E	52ft	F	24ft

8

How long is the border around the outside of this painting?



A	24in	B	38in
C	20in	D	36in
E	8in	F	28in