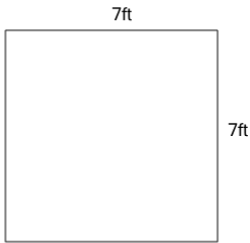
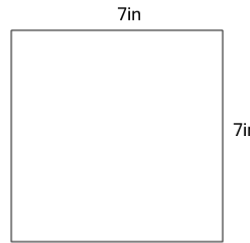
**1**

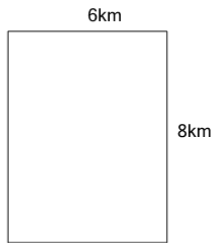
Find the perimeter

A	98ft	B	28ft
C	42ft	D	36ft
E	14ft	F	49ft

2


Find the perimeter

A	36in	B	49in
C	98in	D	14in
E	28in	F	38in

3

Find the perimeter

A	38km	B	28km
C	12km	D	14km
E	32km	F	96km

4

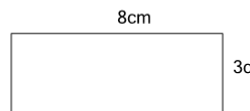
Find the perimeter

A	28km	B	26km
C	9km	D	18km
E	14km		

5


Find the perimeter

A	24in	B	20in
C	28in	D	10in
E	30in	F	48in

6

Find the perimeter

A	22cm	B	11cm
C	24cm	D	38cm
E	32cm	F	48cm

7

Find the perimeter

A	38m	B	11m
C	22m	D	30m
E	26m	F	56m

8

Find the perimeter

A	8km	B	15km
C	16km	D	26km
E	30km	F	10km