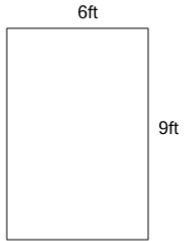


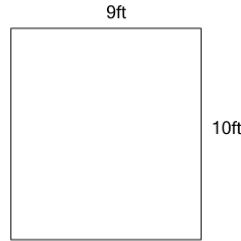


## Perimeter of a Rectangle

**1**

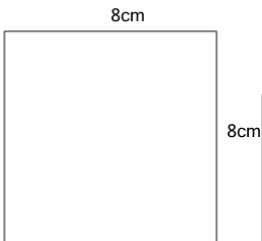
Find the perimeter

A	44ft	B	15ft
C	12ft	D	54ft
E	30ft	F	108ft

**2**


Find the perimeter

A	180ft	B	46ft
C	90ft	D	18ft
E	48ft	F	38ft

**3**

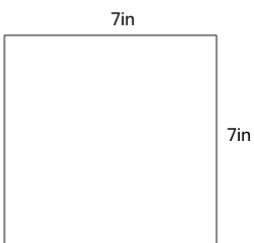
Find the perimeter

A	36cm	B	16cm
C	128cm	D	44cm
E	64cm	F	32cm

**4**

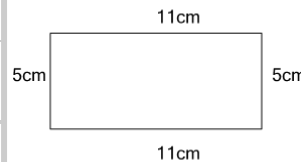
Find the perimeter

A	132km	B	34km
C	22km	D	46km
E	44km	F	66km

**5**

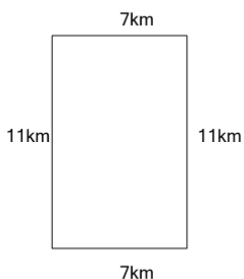
Find the perimeter

A	98in	B	28in
C	38in	D	49in
E	14in	F	36in

**6**

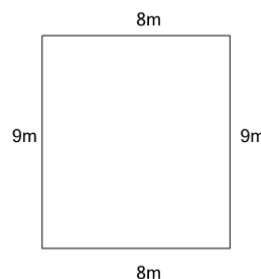
Find the perimeter

A	110cm	B	32cm
C	22cm	D	16cm
E	46cm	F	55cm

**7**

Find the perimeter

A	44km	B	36km
C	18km	D	14km
E	77km	F	154km

**8**

Find the perimeter

A	34m	B	17m
C	42m	D	50m
E	144m	F	72m