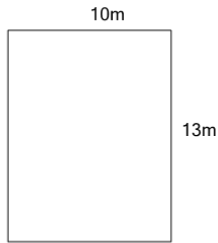
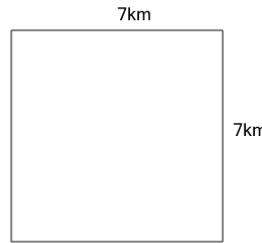


Perimeter of a Rectangle

1

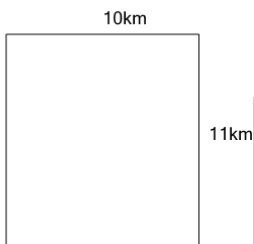
Find the perimeter

A	20m	B	23m
C	60m	D	46m
E	62m	F	130m

2

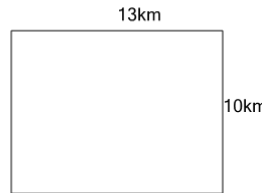
Find the perimeter

A	38km	B	98km
C	28km	D	34km
E	49km	F	14km

3

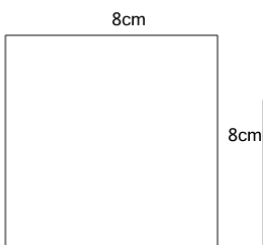
Find the perimeter

A	110km	B	56km
C	42km	D	48km
E	21km	F	220km

4

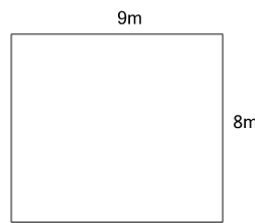
Find the perimeter

A	46km	B	56km
C	130km	D	23km
E	26km	F	260km

5


Find the perimeter

A	32cm	B	36cm
C	64cm	D	16cm
E	128cm	F	44cm

6


Find the perimeter

A	34m	B	48m
C	144m	D	72m
E	18m	F	44m

7

Find the perimeter

A	48ft	B	216ft
C	24ft	D	108ft
E	21ft	F	42ft

8

Find the perimeter

A	182m	B	20m
C	48m	D	40m
E	91m	F	14m