
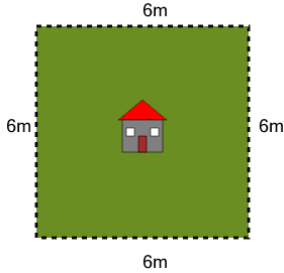


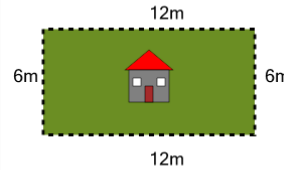


## Perimeter of a Rectangle - Picture Intro

**1**

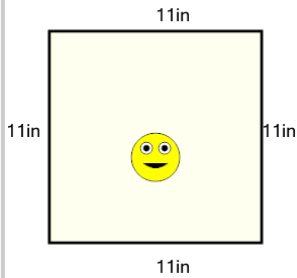
How long is the fence around this yard?

A	26m	B	24m
C	36m	D	34m
E	16m	F	32m

**2**

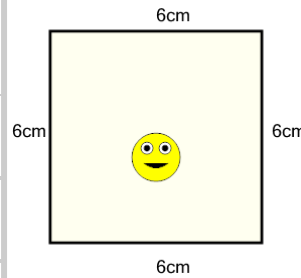
How long is the fence around this yard?

A	39m	B	6m
C	48m	D	21m
E	36m	F	24m

**3**

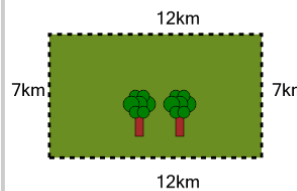
How long is the border around the outside of this painting?

A	28in	B	36in
C	44in	D	56in
E	12in	F	80in

**4**

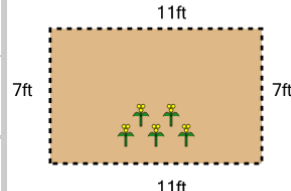
How long is the border around the outside of this painting?

A	24cm	B	4cm
C	20cm	D	16cm
E	8cm	F	18cm

**5**

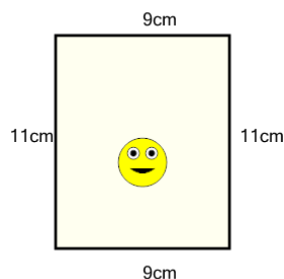
How far is it to run around the outside of this park?

A	11km	B	29km
C	56km	D	38km
E	8km	F	50km

**6**

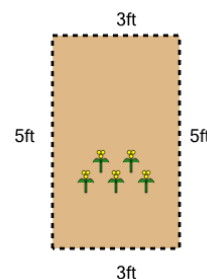
How long is the fence around this garden?

A	54ft	B	36ft
C	60ft	D	15ft
E	39ft	F	21ft

**7**

How long is the border around the outside of this painting?

A	28cm	B	16cm
C	48cm	D	4cm
E	52cm	F	40cm

**8**

How long is the fence around this garden?

A	20ft	B	16ft
C	8ft	D	13ft
E	15ft	F	12ft