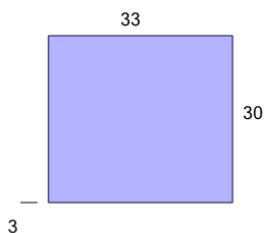


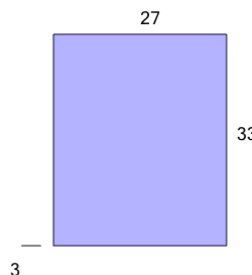


Perimeter of a Rectangle - Segment Coverage from Length and Width

1

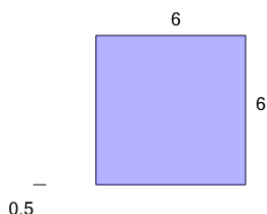
How many of the small line segment will it take to wrap around the larger shape?

A	54	B	10
C	42	D	38
E	22	F	26

2

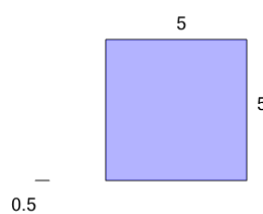
How many of the small line segment will it take to wrap around the larger shape?

A	16	B	20
C	24	D	12
E	40	F	4

3

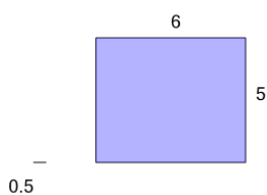
How many of the small line segment will it take to wrap around the larger shape?

A	20	B	24
C	48	D	52
E	12	F	8

4

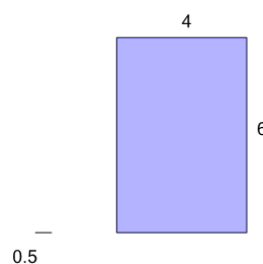
How many of the small line segment will it take to wrap around the larger shape?

A	68	B	60
C	24	D	40
E	36	F	52

5

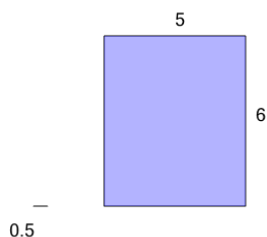
How many of the small line segment will it take to wrap around the larger shape?

A	16	B	64
C	44	D	8
E	20	F	56

6

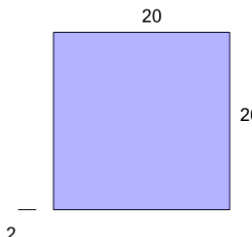
How many of the small line segment will it take to wrap around the larger shape?

A	16	B	68
C	12	D	8
E	52	F	40

7

How many of the small line segment will it take to wrap around the larger shape?

A	56	B	16
C	64	D	44
E	20	F	32

8

How many of the small line segment will it take to wrap around the larger shape?

A	76	B	60
C	40	D	4
E	28	F	24