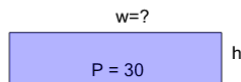


## Perimeter of a Rectangle - Side from Perimeter and Side Ratio

1

Find the missing side length of this rectangle

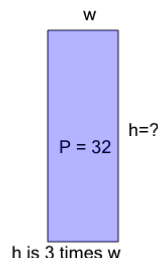


w is 4 times h

A	13	B	17
C	5	D	12
E	20	F	2

2

Find the missing side length of this rectangle

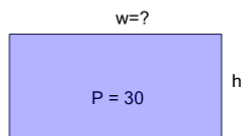


h is 3 times w

A	3	B	21
C	12	D	16
E	2	F	5

3

Find the missing side length of this rectangle

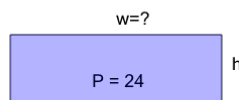


w is 2 times h

A	7	B	8
C	10	D	1
E	14	F	3

4

Find the missing side length of this rectangle

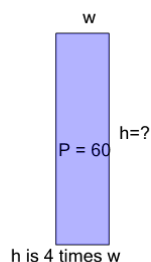


w is 3 times h

A	14	B	9
C	13	D	18
E	16	F	1

5

Find the missing side length of this rectangle

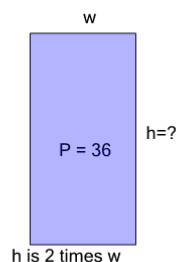


h is 4 times w

A	6	B	42
C	12	D	24
E	10	F	36

6

Find the missing side length of this rectangle

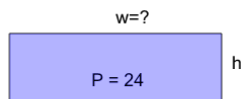


h is 2 times w

A	10	B	20
C	15	D	12
E	5	F	14

7

Find the missing side length of this rectangle

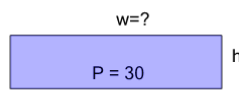


w is 3 times h

A	9	B	2
C	11	D	12
E	17	F	1

8

Find the missing side length of this rectangle



w is 4 times h

A	16	B	15
C	12	D	3
E	11	F	8