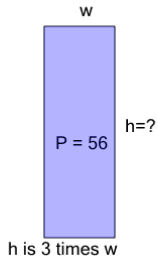


Perimeter of a Rectangle - Side from Perimeter and Side Ratio

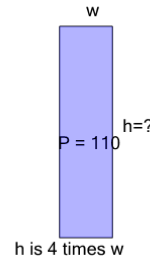
1



Find the missing side length of this rectangle

A	9	B	17
C	23	D	37
E	29	F	21

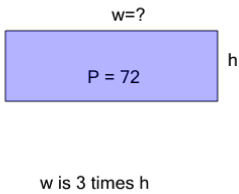
2



Find the missing side length of this rectangle

A	44	B	32
C	76	D	28
E	36	F	8

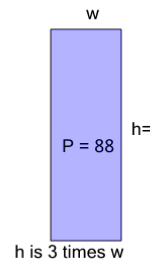
3



Find the missing side length of this rectangle

A	19	B	39
C	27	D	33
E	31	F	21

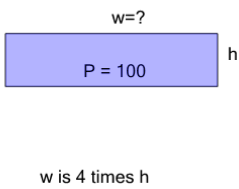
4



Find the missing side length of this rectangle

A	12	B	60
C	48	D	33
E	9	F	51

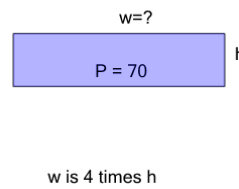
5



Find the missing side length of this rectangle

A	44	B	64
C	32	D	4
E	40	F	72

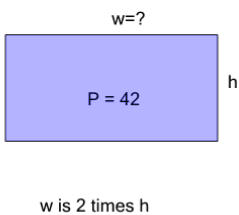
6



Find the missing side length of this rectangle

A	36	B	14
C	38	D	24
E	28	F	16

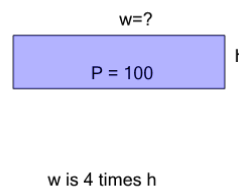
7



Find the missing side length of this rectangle

A	11	B	14
C	19	D	9
E	20	F	4

8



Find the missing side length of this rectangle

A	68	B	72
C	40	D	44
E	4	F	24